

REPRESENTATIONS...

Probability

What do I need to be able to do?

By the end of this unit you should be able to:

- Find single event probability
- Find relative frequency
- Find expected outcomes
- Find independent events
- Use diagrams to work out probabilities

Keywords

Probability: the chance that something will happen

Relative Frequency: how often something happens divided by the outcomes

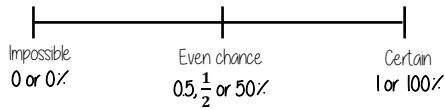
Independent: an event that is not effected by any other events.

Chance: the likelihood of a particular outcome.

Event: the outcome of a probability – a set of possible outcomes.

Biased: a built in error that makes all values wrong by a certain amount.

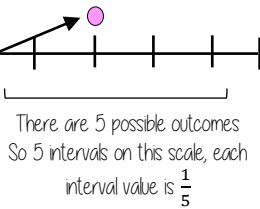
The probability scale



The more likely an event the further up the probability it will be in comparison to another event (It will have a probability closer to 1)



There are 2 pink and 2 yellow balls, so they have the same probability



Single event probability

Probability is always a value between 0 and 1



The probability of getting a blue ball is $\frac{1}{5}$
∴ The probability of NOT getting a blue ball is $\frac{4}{5}$

The sum of the probabilities is 1

The table shows the probability of selecting a type of chocolate

Dark	Milk	White
0.15	0.35	

$$P(\text{white chocolate}) = 1 - 0.15 - 0.35 = 0.5$$



Relative Frequency

$$\frac{\text{Frequency of event}}{\text{Total number of outcomes}}$$

Remember to calculate or identify the overall number of outcomes!

Colour	Frequency	Relative Frequency
Green	6	0.3
Yellow	12	0.6
Blue	2	0.1
	20	

Expected outcomes

Expected outcomes are estimations. It is a long term average rather than a prediction.

Dark	Milk	White
0.15	0.35	0.5

The sum of the probabilities is 1

An experiment is carried out 400 times

Show that dark chocolate is expected to be selected 60 times

$$0.15 \times 400 = 60$$

Relative frequency can be used to find expected outcomes

e.g. Use the relative probability to find the expected outcome for green if there are 100 selections

$$\text{Relative frequency} \times \text{Number of times} \\ 0.3 \times 100 = 30$$

Independent events



The rolling of one dice has no impact on the rolling of the other. The individual probabilities should be calculated separately.

$$\text{Probability of event 1} \times \text{Probability of event 2}$$



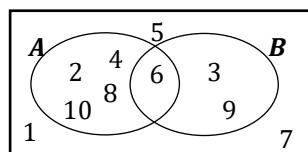
$$P(5) = \frac{1}{6} \quad P(R) = \frac{1}{4}$$

Find the probability of getting a 5 and a red

$$P(5 \text{ and } R) = \frac{1}{6} \times \frac{1}{4} = \frac{1}{24}$$

Using diagrams

Recap Venn diagrams, Sample space diagrams and Two-way tables



	Car	Bus	Wak	Total
Boys	15	24	14	53
Girls	6	20	21	47
Total	21	44	35	100

The possible outcomes from tossing a coin

The possible outcomes from rolling a dice

	1	2	3	4	5	6
H	1H	2H	3H	4H	5H	6H
T	1T	2T	3T	4T	5T	6T